


1.

At the pet shop there are an equal number of rabbits in hutches. Here are the current number of rabbits and hutches:



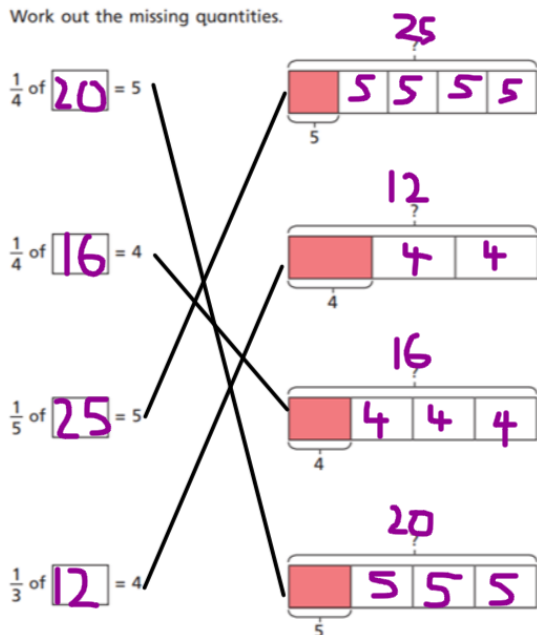
a) How many rabbits in one hutch?

b)  $\frac{1}{6} = 4$     $\frac{2}{6} = 8$     $\frac{3}{6} = 12$     $\frac{4}{6} = 16$   
 $\frac{5}{6} = 20$     $\frac{6}{6}$  or 1 whole = 24

2.

Match the calculations to the bar models.

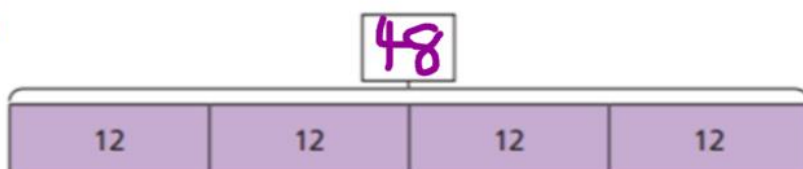
Work out the missing quantities.



3.

Complete the bar models and fill in the whole.

a)



$12 \times 4 =$