


1.

Match the representations to the correct numeral.



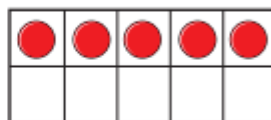
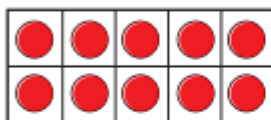
12

7

10

2.

Here is a number.



a) What is the number?

b) Use counters and ten frames.

Make this number in a different way.

Draw your counters.



3.

Complete the number tracks.

10	11	12							
----	----	----	--	--	--	--	--	--	--

			12	13					
--	--	--	----	----	--	--	--	--	--

18	17								
----	----	--	--	--	--	--	--	--	--

4.

Circle the odd one out and explain why.

11 12 13 14
15 61 17 18