

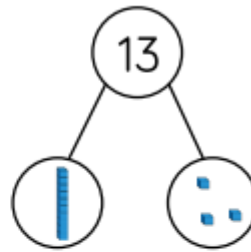
1.

Use the part-whole model to complete the sentences.

My number is _____

One part is _____, the other part is _____

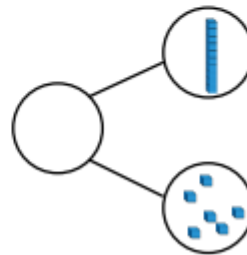
The whole is _____



My number is _____

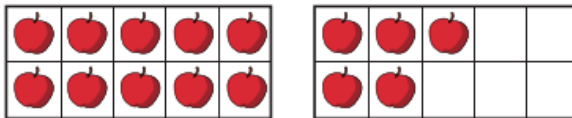
It has _____ tens and _____ ones.

The whole is _____



2.

a) How many apples are there?



There is ten and ones.

There are apples.

b) How many bees are there?



There is ten and ones.

There are bees.

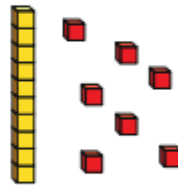
3.

Match the number sentences to the pictures.

1 ten and 7 ones



1 ten and 1 one



1 ten and 8 ones



4.

Is this true or false?

The ten frames show the number 16

