

1 Use cubes to make 12, 7 and 15

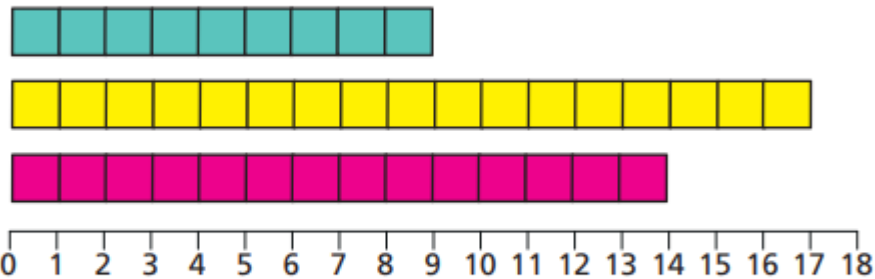
- a) Which number is the smallest?
- b) Which number is the greatest?
- c) Write the numbers in order.

Start with the greatest number.

3 Order the numbers from smallest to greatest.

- a) 12, 8, 15
- b) 16, 18, 17
- c) 20, 13, 9
- d) 11, 19, 18

2 a) How many tiles are there?



- b) Write the number of tiles in order.
- Start with the greatest number.

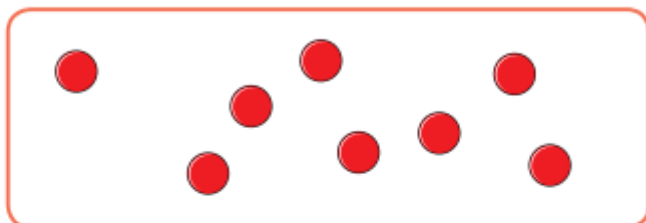
4 Order the numbers from greatest to smallest.

- a) 16, 7, 13
- b) 9, 12, 17
- c) 9, 20, 19
- d) 14, 17, 12

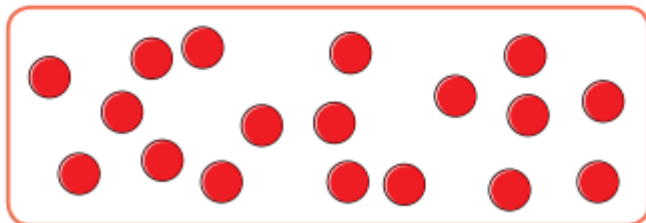
- 5 The counters are in order from smallest to greatest.

Draw the missing counters.

smallest



greatest



Is there more than one answer?